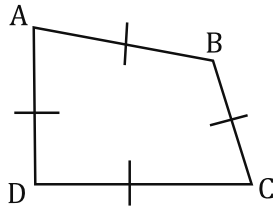


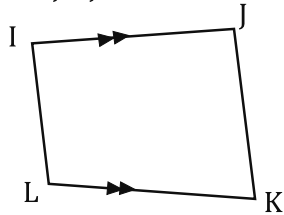
For these, choose the answer that is the most specific name for the quadrilateral. Remember, none of the figures are drawn to scale...

1.  $\overline{AB} \cong \overline{BC} \cong \overline{CD} \cong \overline{DA}$ .



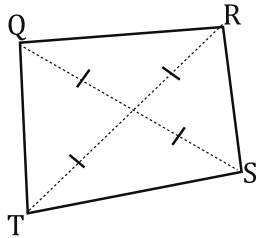
- A. Rhombus
- B. Quadrilateral
- C. Rectangle
- D. Square

3.  $\overline{IJ} \parallel \overline{JK}$



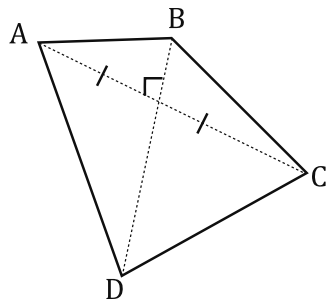
- A. Parallelogram
- B. Rectangle
- C. Trapezoid
- D. Rhombus

5.  $\overline{QS} \cong \overline{RT}$ ,  $\overline{QS}$  and  $\overline{RT}$  bisect each other.



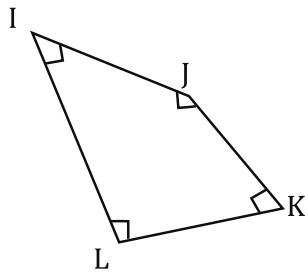
- A. Rhombus
- B. Parallelogram
- C. Square
- D. Rectangle

7.  $\overline{AC} \perp \overline{BD}$ , and  $\overline{BD}$  bisects  $\overline{AC}$ .



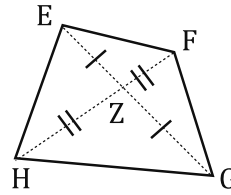
- A. Kite
- B. Quadrilateral
- C. Rhombus
- D. Square

9.  $\angle I$ ,  $\angle J$ ,  $\angle K$ , and  $\angle L$  are all  $90^\circ$ .



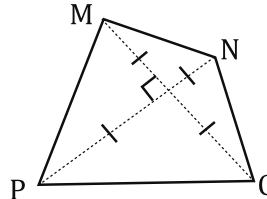
- A. Quadrilateral
- B. Rectangle
- C. Square
- D. Rhombus

2.  $\overline{EG}$  bisects  $\overline{FH}$ , and  $\overline{FH}$  bisects  $\overline{EG}$ .



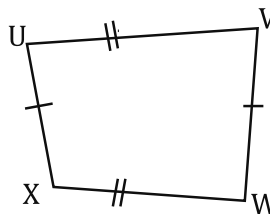
- A. Trapezoid
- B. Rectangle
- C. Parallelogram
- D. Square

4.  $\overline{MO} \cong \overline{NP}$ ,  $\overline{MO} \perp \overline{NP}$



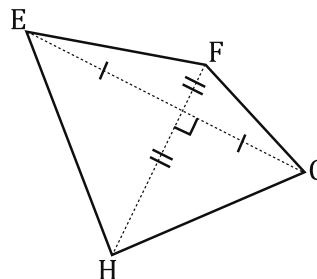
- A. Kite
- B. Parallelogram
- C. Rectangle
- D. Square

6.  $\overline{UX} \cong \overline{VW}$ ,  $\overline{UV} \cong \overline{XW}$



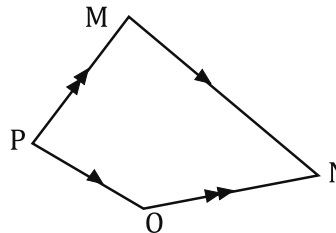
- A. Rectangle
- B. Parallelogram
- C. Rectangle
- D. Trapezoid

8.  $\overline{FH} \perp \overline{EG}$ ,  $\overline{FH}$  bisects  $\overline{EG}$  and  $\overline{EG}$  bisects  $\overline{FH}$ .



- A. Kite
- B. Rhombus
- C. Rectangle
- D. Square

10.  $\overline{MN} \parallel \overline{OP}$ , and  $\overline{PM} \parallel \overline{ON}$ .




- A. Trapezoid
- B. Rectangle
- C. Square
- D. Parallelogram

Bubble the correct answer choice from each item above.

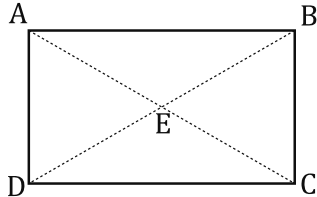
1.	2.	3.	4.	5.	6.	7.	8.	9.	10.
<input type="radio"/> A.	<input type="radio"/> A.	<input type="radio"/> A.	<input type="radio"/> A.	<input type="radio"/> A.	<input type="radio"/> A.	<input type="radio"/> A.	<input type="radio"/> A.	<input type="radio"/> A.	<input type="radio"/> A.
<input type="radio"/> B.	<input type="radio"/> B.	<input type="radio"/> B.	<input type="radio"/> B.	<input type="radio"/> B.	<input type="radio"/> B.	<input type="radio"/> B.	<input type="radio"/> B.	<input type="radio"/> B.	<input type="radio"/> B.
<input type="radio"/> C.	<input type="radio"/> C.	<input type="radio"/> C.	<input type="radio"/> C.	<input type="radio"/> C.	<input type="radio"/> C.	<input type="radio"/> C.	<input type="radio"/> C.	<input type="radio"/> C.	<input type="radio"/> C.
<input type="radio"/> D.	<input type="radio"/> D.	<input type="radio"/> D.	<input type="radio"/> D.	<input type="radio"/> D.	<input type="radio"/> D.	<input type="radio"/> D.	<input type="radio"/> D.	<input type="radio"/> D.	<input type="radio"/> D.

11.  $\angle Q \cong \angle S$ , and  $\angle R \cong \angle T$ .




- A. Square
- B. Rectangle
- C. Parallelogram
- D. Quadrilateral

13.  $\angle EAB$ ,  $\angle EAD$ ,  $\angle ADE$ , and  $\angle CDE$  measure  $45^\circ$ .



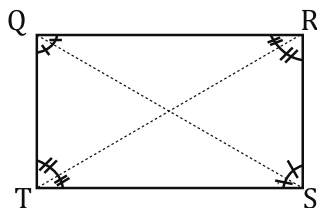
- A. Trapezoid
- B. Square
- C. Parallelogram
- D. Rhombus

15.  $m\angle L + m\angle I = 180^\circ$ ,  $m\angle L + m\angle K = 180^\circ$ .




- A. Rectangle
- B. Trapezoid
- C. Parallelogram
- D. Square

17.  $\overline{QS}$  bisects  $\angle RQT$  and  $\angle RST$ ,  $\overline{RT}$  bisects  $\angle SRQ$  and  $\angle QTS$ .



- A. Trapezoid
- B. Parallelogram
- C. Rectangle
- D. Rhombus

19.  $\angle A$ ,  $\angle B$ ,  $\angle C$ , and  $\angle D$  all measure  $90^\circ$ .



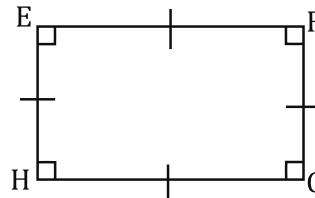
- A. Rectangle
- B. Square
- C. Kite
- D. Rhombus

12.  $m\angle X + m\angle U = 180^\circ$ .




- A. Trapezoid
- B. Square
- C. Parallelogram
- D. Rectangle

14.  $\overline{AB} \cong \overline{BC} \cong \overline{CD} \cong \overline{DA}$ .



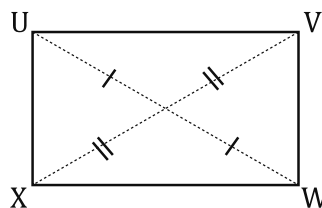
- A. Rectangle
- B. Square
- C. Rhombus
- D. Kite

16.  $\overline{PM} \parallel \overline{ON}$ .



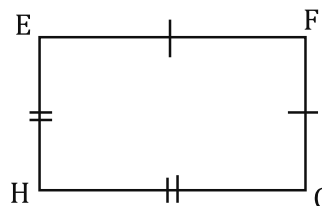
- A. Kite
- B. Trapezoid
- C. Parallelogram
- D. Quadrilateral

18.  $\overline{UW}$  bisects  $\overline{VX}$ , and  $\overline{VX}$  bisects  $\overline{UW}$ .



- A. Parallelogram
- B. Rectangle
- C. Kite
- D. Rhombus

20.  $\overline{EF} \cong \overline{FG}$ , and  $\overline{GH} \cong \overline{HE}$ .

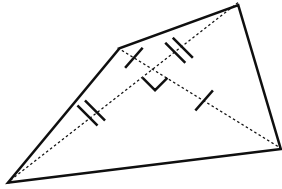


- A. Quadrilateral
- B. Rectangle
- C. Kite
- D. Rhombus

Bubble the correct answer choice from each item above.

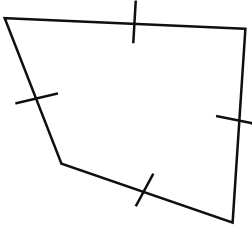
11.	12.	13.	14.	15.	16.	17.	18.	19.	20.
<input type="radio"/> A.	<input type="radio"/> A.	<input type="radio"/> A.	<input type="radio"/> A.	<input type="radio"/> A.	<input type="radio"/> A.	<input type="radio"/> A.	<input type="radio"/> A.	<input type="radio"/> A.	<input type="radio"/> A.
<input type="radio"/> B.	<input type="radio"/> B.	<input type="radio"/> B.	<input type="radio"/> B.	<input type="radio"/> B.	<input type="radio"/> B.	<input type="radio"/> B.	<input type="radio"/> B.	<input type="radio"/> B.	<input type="radio"/> B.
<input type="radio"/> C.	<input type="radio"/> C.	<input type="radio"/> C.	<input type="radio"/> C.	<input type="radio"/> C.	<input type="radio"/> C.	<input type="radio"/> C.	<input type="radio"/> C.	<input type="radio"/> C.	<input type="radio"/> C.
<input type="radio"/> D.	<input type="radio"/> D.	<input type="radio"/> D.	<input type="radio"/> D.	<input type="radio"/> D.	<input type="radio"/> D.	<input type="radio"/> D.	<input type="radio"/> D.	<input type="radio"/> D.	<input type="radio"/> D.

21.



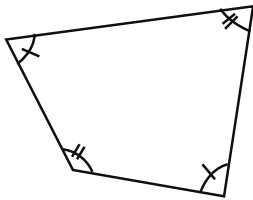
- A. Square
- B. Parallelogram
- C. Rectangle
- D. Rhombus

23.



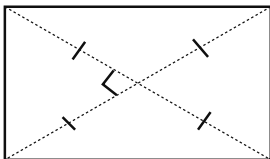
- A. Rhombus
- B. Quadrilateral
- C. Rectangle
- D. Square

25.



- A. Parallelogram
- B. Quadrilateral
- C. Kite
- D. Rhombus

27.



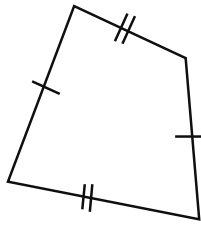
- A. Rhombus
- B. Rectangle
- C. Parallelogram
- D. Square

29.



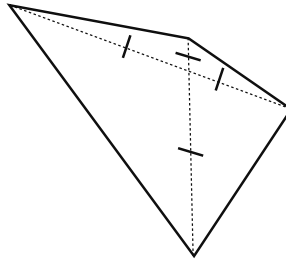
- A. Rectangle
- B. Quadrilateral
- C. Trapezoid
- D. Kite

22.



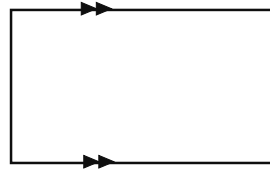
- A. Rectangle
- B. Parallelogram
- C. Square
- D. Trapezoid

24.



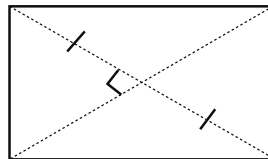
- A. Parallelogram
- B. Square
- C. Rhombus
- D. Rectangle

26.



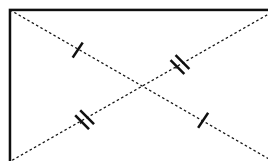
- A. Trapezoid
- B. Parallelogram
- C. Rectangle
- D. Kite

28.



- A. Trapezoid
- B. Quadrilateral
- C. Kite
- D. Parallelogram

30.



- A. Rhombus
- B. Square
- C. Trapezoid
- D. Parallelogram

Bubble the correct answer choice from each item above.

21.	22.	23.	24.	25.	26.	27.	28.	29.	30.
<input type="radio"/> A.	<input type="radio"/> A.	<input type="radio"/> A.	<input type="radio"/> A.	<input type="radio"/> A.	<input type="radio"/> A.	<input type="radio"/> A.	<input type="radio"/> A.	<input type="radio"/> A.	<input type="radio"/> A.
<input type="radio"/> B.	<input type="radio"/> B.	<input type="radio"/> B.	<input type="radio"/> B.	<input type="radio"/> B.	<input type="radio"/> B.	<input type="radio"/> B.	<input type="radio"/> B.	<input type="radio"/> B.	<input type="radio"/> B.
<input type="radio"/> C.	<input type="radio"/> C.	<input type="radio"/> C.	<input type="radio"/> C.	<input type="radio"/> C.	<input type="radio"/> C.	<input type="radio"/> C.	<input type="radio"/> C.	<input type="radio"/> C.	<input type="radio"/> C.
<input type="radio"/> D.	<input type="radio"/> D.	<input type="radio"/> D.	<input type="radio"/> D.	<input type="radio"/> D.	<input type="radio"/> D.	<input type="radio"/> D.	<input type="radio"/> D.	<input type="radio"/> D.	<input type="radio"/> D.

For these choose the answer that is the most specific name for the quadrilateral. (Draw a picture first!)

31. In quadrilateral ABCD  $\overline{AB} \cong \overline{CD}$  and  $\overline{BC} \cong \overline{DA}$ .  
Quadrilateral ABCD is a...

- A. Rectangle
- B. Parallelogram
- C. Square
- D. Trapezoid

33. In quadrilateral IJKL  $\overline{IK}$  and  $\overline{JL}$  are perpendicular and bisect each other.  
Quadrilateral IJKL is a...

- A. Rhombus
- B. Parallelogram
- C. Rectangle
- D. Square

35. In quadrilateral QRST  $\overline{QS} \cong \overline{RT}$ . Quadrilateral QRST is a...

- A. Rhombus
- B. Quadrilateral
- C. Rectangle
- D. Square

37. In quadrilateral ABCD  $\overline{AB} \cong \overline{CD} \cong \overline{BC} \cong \overline{DA}$ , and all angles are  $90^\circ$ . Quadrilateral ABCD is a...

- A. Rectangle
- B. Square
- C. Parallelogram
- D. Rhombus

39. Quadrilateral IJKL is equilateral.  
Quadrilateral IJKL is a...

- A. Rhombus
- B. Trapezoid
- C. Rectangle
- D. Square

32. In quadrilateral EFGH  $\overline{EG}$  and  $\overline{FH}$  bisect each other. Quadrilateral EFGH is a...

- A. Quadrilateral
- B. Square
- C. Parallelogram
- D. Rectangle

34. In quadrilateral MNOP  $\overline{MN} \parallel \overline{OP}$ . Quadrilateral MNOP is a...

- A. Square
- B. Parallelogram
- C. Rectangle
- D. Trapezoid

36. In quadrilateral UVWX  $\overline{UW} \cong \overline{VX}$ ,  $\overline{UW}$  bisects  $\overline{VX}$ , and  $\overline{UW} \perp \overline{VX}$ . Quadrilateral UVWX is a...

- A. Rhombus
- B. Quadrilateral
- C. Rectangle
- D. Square

38. In quadrilateral EFGH  $\angle E \cong \angle G$ , and  $\angle F \cong \angle H$ .  
Quadrilateral EFGH is a...

- A. Rhombus
- B. Quadrilateral
- C. Parallelogram
- D. Square

40. In quadrilateral MNOP  $\angle P$  and  $\angle M$  are supplementary. Quadrilateral MNOP is a...

- A. Rhombus
- B. Trapezoid
- C. Rectangle
- D. Square

Bubble the correct answer choice from each item above.

31.	32.	33.	34.	35.	36.	37.	38.	39.	40.
<input type="radio"/> A.	<input type="radio"/> A.	<input type="radio"/> A.	<input type="radio"/> A.	<input type="radio"/> A.	<input type="radio"/> A.	<input type="radio"/> A.	<input type="radio"/> A.	<input type="radio"/> A.	<input type="radio"/> A.
<input type="radio"/> B.	<input type="radio"/> B.	<input type="radio"/> B.	<input type="radio"/> B.	<input type="radio"/> B.	<input type="radio"/> B.	<input type="radio"/> B.	<input type="radio"/> B.	<input type="radio"/> B.	<input type="radio"/> B.
<input type="radio"/> C.	<input type="radio"/> C.	<input type="radio"/> C.	<input type="radio"/> C.	<input type="radio"/> C.	<input type="radio"/> C.	<input type="radio"/> C.	<input type="radio"/> C.	<input type="radio"/> C.	<input type="radio"/> C.
<input type="radio"/> D.	<input type="radio"/> D.	<input type="radio"/> D.	<input type="radio"/> D.	<input type="radio"/> D.	<input type="radio"/> D.	<input type="radio"/> D.	<input type="radio"/> D.	<input type="radio"/> D.	<input type="radio"/> D.